


Lecture 15: Universal gravitation

- Kepler's Laws of planetary motion
- Newton's law of universal gravitation
- Free fall acceleration on surface of a planet
- Satellite motion

Brief history of cosmology



Ptolemy (85 - 165)
geocentric theory




Nicolaus Copernicus
(1473-1543)
heliocentric theory



Tycho Brahe
(1546-1601)




Johannes Kepler
(1571-1630)
Laws of planetary motion



Galileo Galilei (1564 - 1642)
telescope
discovered moons orbiting Jupiter
observed phases of Venus

Kepler's Laws: 1st Law

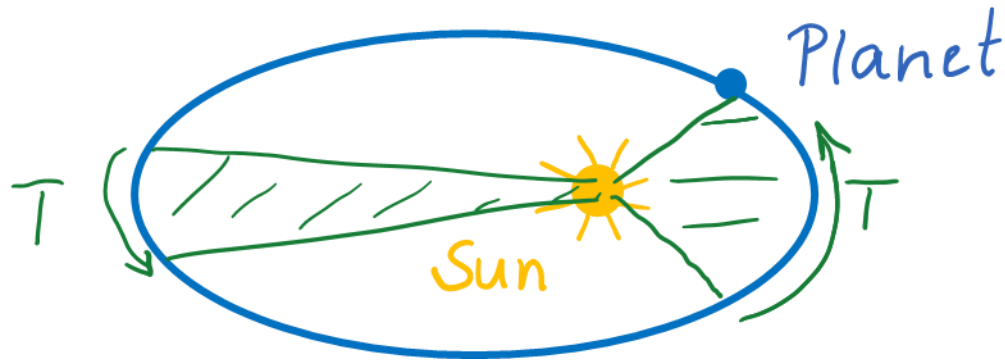
The planets move in elliptical orbits with the sun at one focus of the ellipse.



[Kepler's First Law simulation](#)

Kepler's 2nd Law

A line drawn between the sun and a planet sweeps out equal areas in equal intervals of time

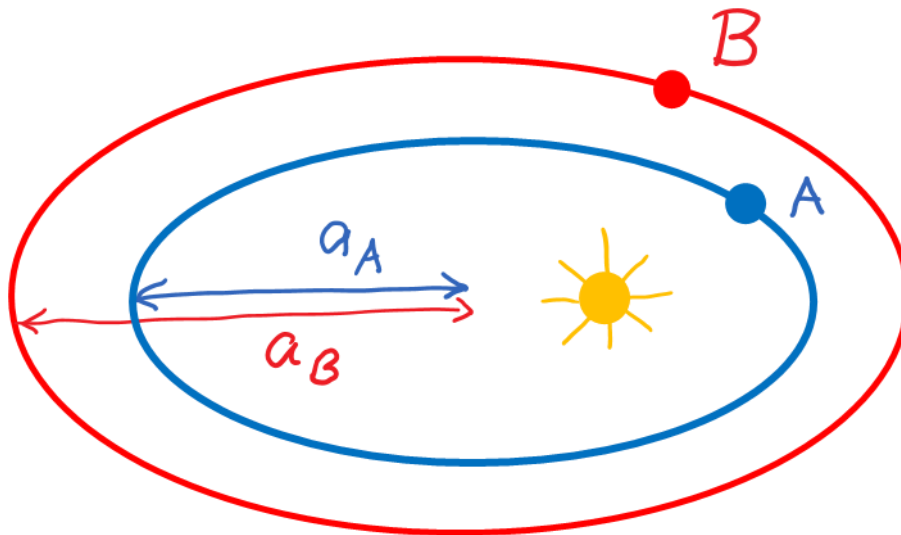
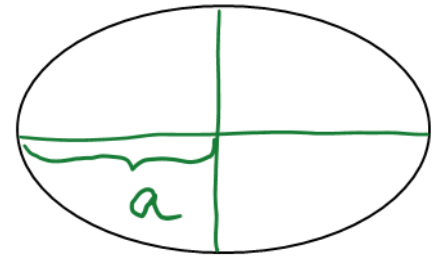


[Keple's 2nd Law simulation](#)

Kepler's 3rd law

The square of a planet's orbital period is proportional to the cube of the semi-major axis length.

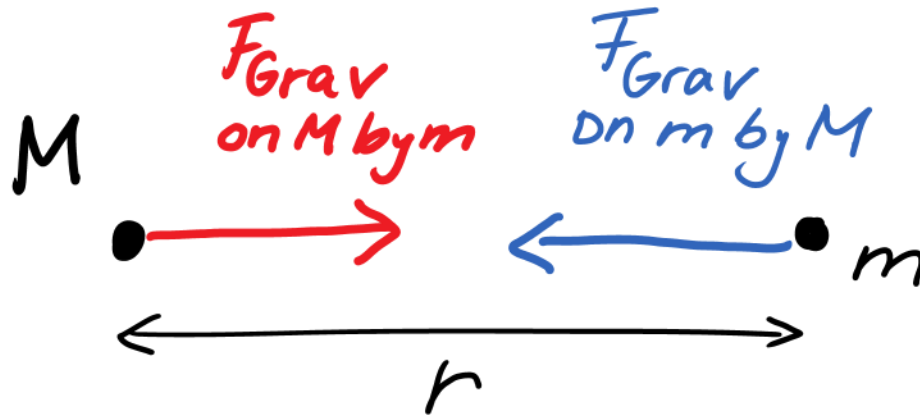
$$T^2 \sim a^3$$




$$\frac{T_A^2}{T_B^2} = \frac{a_A^3}{a_B^3}$$

Newton's Law of Universal Gravitation

$$F_{grav} = \frac{GmM}{r^2}$$



$G = 6.67 \times 10^{-11} \text{ Nm}^2/\text{kg}^2$
Universal gravitational constant



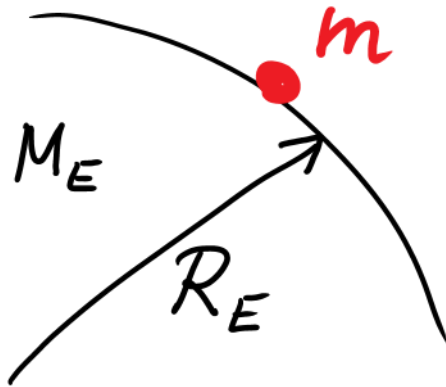
Sir Isaac Newton
(1643 - 1727)

Gravitation near Earth's surface

$$F_{grav} = \frac{GmM}{r^2}$$

But we used $W = F_{grav} = mg$

Force which Earth exerts on object of mass m located close to Earth's surface:



$$F_{grav} = \frac{GmM_{Earth}}{R_{Earth}^2} = mg$$

$$g = \frac{GM_{Earth}}{R_{Earth}^2}$$

→ Find free-fall acceleration on any planet of mass M and radius R

Find mass of Earth

$$g = \frac{GM_{Earth}}{R_{Earth}^2}$$

If G and R_{Earth} known:

$$M_{Earth} = \frac{gR_{Earth}^2}{G}$$

G : Cavendish balance

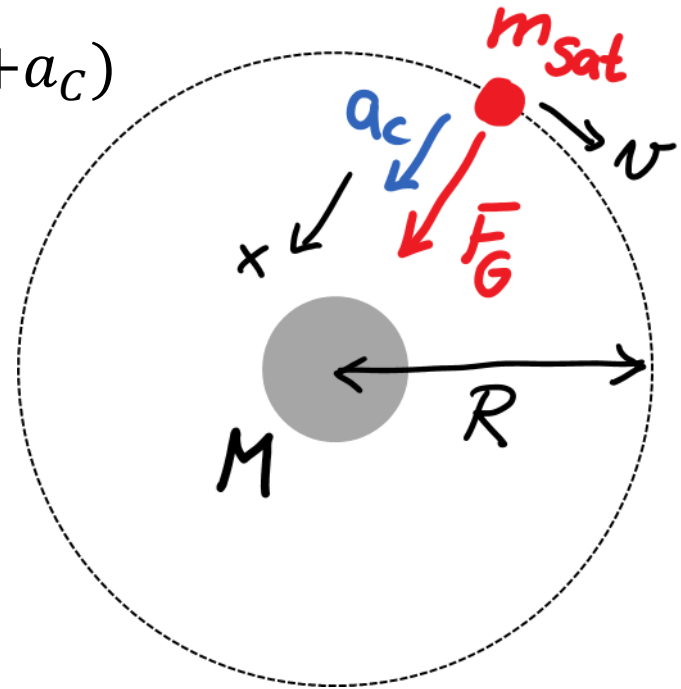
R_E : Eratosthenes 200BC

Satellite Motion

$$\sum F_x = F_{grav,x} = m_{sat} a_x = m_{sat} (+a_c)$$

$$\frac{Gm_{sat}M}{R^2} = m_{sat} \frac{v^2}{R}$$

$$\frac{GM}{R} = v^2 = \left(\frac{2\pi R}{T} \right)^2$$



$$T^2 = \frac{4\pi^2}{GM} R^3$$

Kepler's 3rd Law

Example 2

A satellite of mass m is orbiting with period T in a circular orbit a distance h above the surface of a planet. The radius of the planet is R . Find the free-fall acceleration on the planet's surface.